


PUSH BOX MISSING QUANTITY



$$\square - \square + \square = \square$$

$$3 + \square + 4 = 14$$

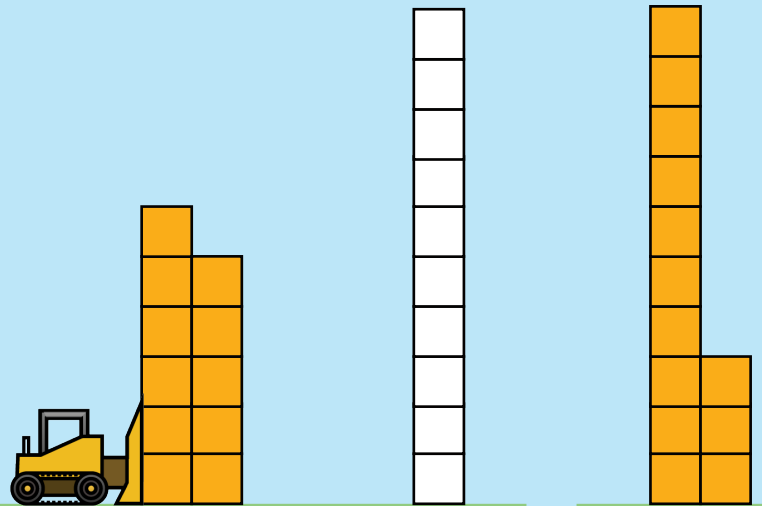
$$\square + 8 - 9 = 1$$

$$\square - 6 + 6 = 10$$


$$8 + 4 + 7 = \square$$

$$\square = 19 - 4 - 3$$

$$10 + \square + 7 = 25$$



$$\square \circ \square \circ \square = \square$$



I have **11** stickers. I got **5** more stickers from Arman, then gave **3** stickers to Mateo. How many stickers do I have now?

Oh! The game can help me figure this out!