





# LEAST MOST

Which of these numbers is the *least*?

And *greatest*?


- 489
- 418
- 490
- 407
- 477



400 200 500

I'll circle each number that is the least.

700 759 760 710



I'll squiggle under each number that is the greatest.


503 603 103

800  842

143 199   98

292 929

543 123  45 321



I think these go from least to greatest because the *ones place* goes "1, 2, 3, 4, 5"

I think the correct order is:

because...

Large empty box for writing an explanation.

- 571
- 532
- 583
- 544
- 565