



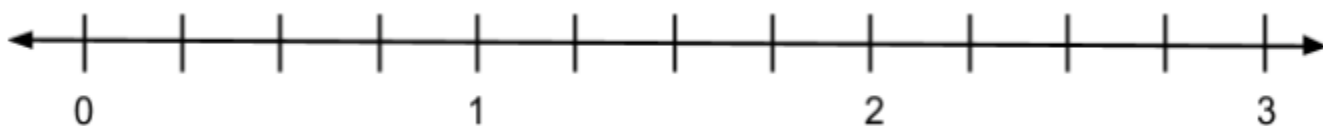
ST Math.
Summer Immersion
Grade 3 | Quiz

Module 3 Pre-Quiz

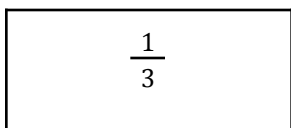
Name: _____ Date: _____

1. Plot these numbers on the number line.

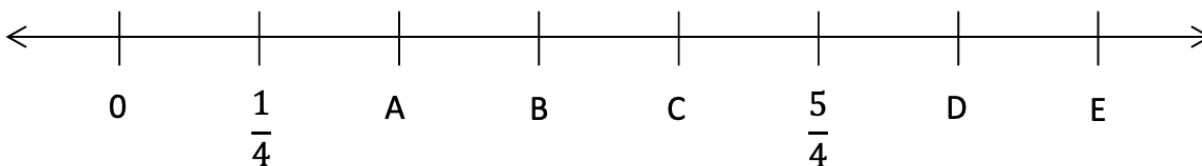
$$\frac{5}{4}, \frac{1}{2}, \frac{2}{2}, \frac{1}{4}, \frac{8}{4}, 2\frac{1}{2}$$



2. This shape represents $\frac{1}{3}$. Draw $\frac{6}{3}$.



3. Write the letter next to each number to show where it goes on the number line.



1 _____

$\frac{7}{4}$ _____

$\frac{1}{2}$ _____

$1\frac{1}{2}$ _____



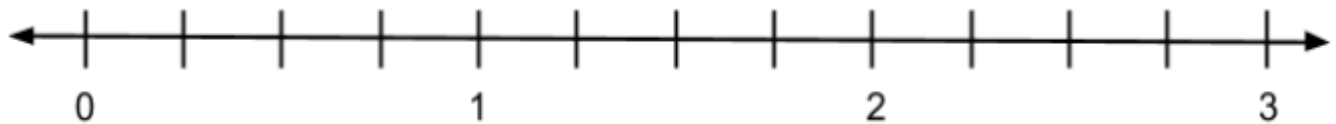
ST Math.
Summer Immersion
Grade 3 | Quiz

Module 3 Post-Quiz

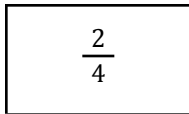
Name: _____ Date: _____

1. Plot these numbers on the number line

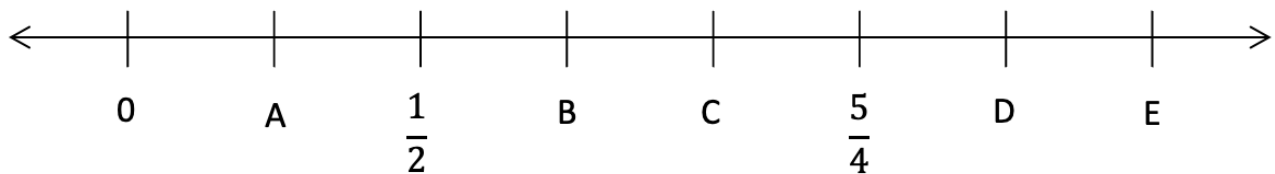
$$\frac{4}{4}, \frac{1}{4}, \frac{3}{2}, 2\frac{1}{4}, \frac{4}{2}, \frac{2}{4}$$



2. This shape represents $\frac{2}{4}$. Draw $\frac{10}{4}$.



3. Write the letter next to each number to show where it goes on the number line.



$$\frac{4}{4} \underline{\hspace{2cm}}$$

$$1\frac{3}{4} \underline{\hspace{2cm}}$$

$$\frac{1}{4} \underline{\hspace{2cm}}$$

$$1\frac{1}{2} \underline{\hspace{2cm}}$$