



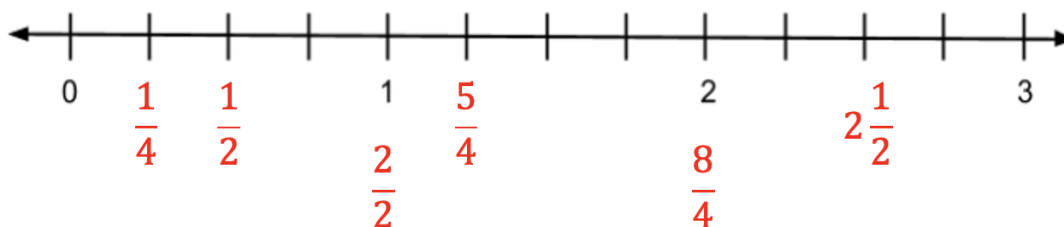
ST Math. Summer Immersion

Grade 3 | Quizzes Answer Key


Module 3 Pre-Quiz

1. Plot these numbers on the number line.

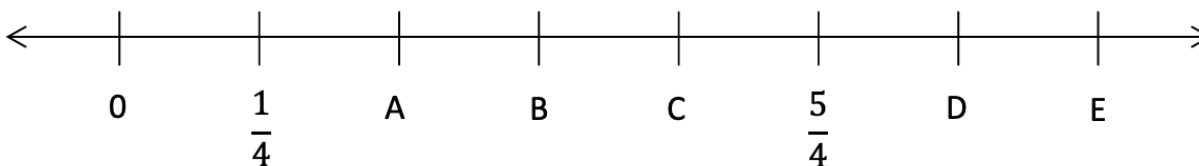
$$\frac{5}{4}, \frac{1}{2}, \frac{2}{2}, \frac{1}{4}, \frac{8}{4}, 2\frac{1}{2}$$



2. This shape represents $\frac{1}{3}$. Draw $\frac{6}{3}$.



3. Write the letter next to each number to show where it goes on the number line.



1 C

$\frac{7}{4}$ E

$\frac{1}{2}$ B

$1\frac{1}{2}$ D



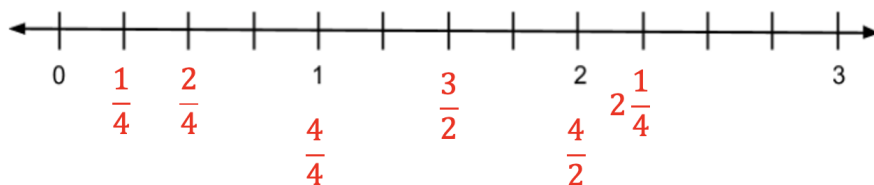
ST Math. Summer Immersion

Grade 3 | Quizzes Answer Key

Module 3 Post-Quiz

1. Plot these numbers on the number line,

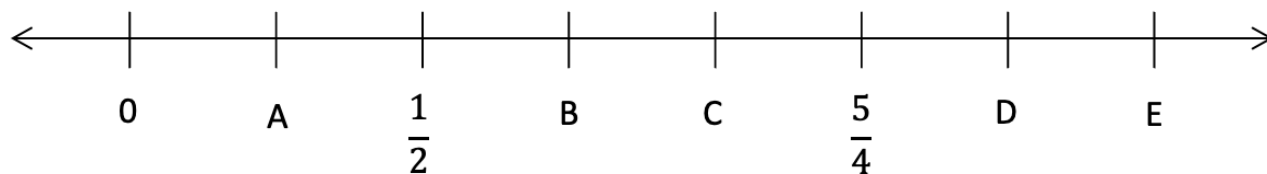
$$\frac{4}{4}, \frac{1}{4}, \frac{3}{2}, 2\frac{1}{4}, \frac{4}{2}, \frac{2}{4}$$



2. This shape represents $\frac{2}{4}$. Draw $\frac{10}{4}$.



3. Write the letter next to each number to show where it goes on the number line.



$$\frac{4}{4} \quad \underline{\text{C}}$$

$$1\frac{3}{4} \quad \underline{\text{E}}$$

$$\frac{1}{4} \quad \underline{\text{A}}$$

$$1\frac{1}{2} \quad \underline{\text{D}}$$